

To be able to identify notes and coins

MathShed

Starter:
Which one doesn't belong?

A



B



C



D



Explain your answer.

To be able to identify notes and coins

MathShed


Activity 1:
Match the words to the correct amount.

fifty cents

fifteen dollars

fifty dollars

five dollars




To be able to identify notes and coins

MathShed

Activity 2:
How much money is in the piggy bank?










The piggy bank contains
\$__ and __¢.












To be able to identify notes and coins











MathShed











Activity 3:
Use the comparison symbols (<, > or =) to complete the following statements:



To be able to identify notes and coins


MathShed

Activity 4:
Ruth has five of the same bank notes in her piggy bank.

a) What is the greatest amount of money she could have in her piggy bank?

b) What is the least amount of money she could have in her piggy bank?

Explain your answers.



To be able to identify notes and coins

MathShed

Activity 5:
James says, "\$10 and 10¢ are worth the same."
Do you agree?
Explain your answer.

To be able to identify notes and coins



Evaluation:



If I have three bank notes in my wallet and no coins, I have an even-numbered amount of money in my wallet.

Is Astrobee's statement always, sometimes or never true?
Explain your answer.