

To be able to count money - coins

MathShed

Starter:
Which coin would you most like to receive from the tooth fairy?





Explain your answer.


To be able to count money - coins


MathShed

Activity 1:
Count the coins and give their total in the box on the right-hand side.

 = \$

 = \$


 = ¢


 = ¢


To be able to count money - coins

MathShed

Activity 2:
Use the comparison symbols (<, > or =) to compare the money below:










To be able to count money - coins

MathShed

Activity 3:
Count the coins and give their total in the box on the right-hand side.

 = \$


 = ¢


 = ¢


To be able to count money - coins

MathShed

Activity 4:
Complete the statements below.

 =

 >

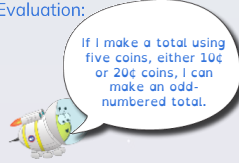
 >

Can you think of more than one solution each time?

To be able to count money - coins

MathShed

Evaluation:



If I make a total using five coins, either 10¢ or 20¢ coins, I can make an odd-numbered total.

Do you agree with Astrobee?
Explain your answer.