

To be able to recognise coins

MathShed

Starter:
Which one does not belong?



Explain your answer.

To be able to recognise coins

MathShed

Activity 1:
Match each coin to its value.




\$1 20¢ 50¢ 10¢

To be able to recognise coins

MathShed

Activity 1 (continued):
Match each coin to its value.




10¢ \$2 \$1 50¢

To be able to recognise coins

MathShed

Activity 2:
Look at the set of coins, then complete the sentences below.



There are _____ \$1 coins. There are _____ 20¢ coins.


There are _____ 50¢ coins.

There are _____ 10¢ coins. There are _____ \$2 coins.

To be able to recognise coins

MathShed

Activity 3:
Use the comparison symbols <, > and = to compare the coins below.



To be able to recognise coins

MathShed

Activity 4:
Chen says, "I have a silver coin in my hand. It is worth more than 10¢, but less than \$1."
What might his coin be? Is there only one possibility?
Sketch in the box below.

To be able to recognise coins

MathShed

Evaluation: Silver coins are worth more than other coins.



Is Astrobee's statement always, sometimes or never true?
Explain your answer.