

To be able to convert fractions to percentages

MathShed

Starter:
Which one doesn't belong?



$\frac{1}{4}$ 50% $\frac{100}{200}$ 0.5



Explain your answer.

To be able to convert fractions to percentages

MathShed

Activity 1:
Convert the shaded area into a fraction over 100, then into a percentage.

 $\frac{\quad}{100} = \quad\%$  $\frac{\quad}{100} = \quad\%$

 $\frac{\quad}{100} = \quad\%$  $\frac{\quad}{100} = \quad\%$

To be able to convert fractions to percentages

MathShed

Activity 2:
Complete the table, writing fractions in their simplest forms:

percentage	fraction
10%	$\frac{1}{10}$
50%	
	$\frac{1}{4}$
	$\frac{1}{5}$
75%	
40%	
	$\frac{3}{10}$

To be able to convert fractions to percentages

MathShed

Activity 3:
Fill in the blanks below.

$\frac{26}{100} = \quad\%$ $\frac{\quad}{100} = 59\%$

$\frac{80}{200} = \frac{\quad}{100} = \quad\%$ $\frac{43}{50} = \frac{\quad}{100} = \quad\%$

To be able to convert fractions to percentages

MathShed

Activity 4:
Solve the word problems below.

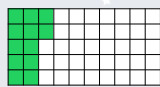
a) Ruth and Jamal are comparing how much battery life their phones have. Ruth's phone has 55% battery life remaining; Jamal's phone is half charged. Whose phone has more battery life?

b) James and Yasmin took part in a spelling competition. James got three quarters of the spellings correct; Yasmin got 75% correct. James says, "I got more spellings correct." Do you agree? Explain your answer.

To be able to convert fractions to percentages

MathShed

Activity 5:
Look at the diagram.



Ahmed says, "12% of the diagram is green."
Chen says, "24% of the diagram is green."

Who do you agree with?
Explain your answer.

To be able to convert fractions to percentages



Evaluation:



If one fraction has a greater numerator than another fraction, it will be greater as a percentage.

Is Astrobee's statement always, sometimes or never true?
Explain your answer.