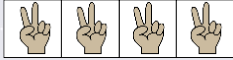

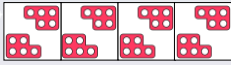


To be able to identify equal groups



Activity 5:

Circle the group that doesn't belong.



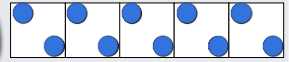
Explain your answer.

To be able to identify equal groups



Evaluation:

I have made two equal groups with each group showing five counters.



Do you agree?
Explain your answer.