




To be able to identify multiples of whole numbers 

Starter:
Which one doesn't belong?




Explain your answer.

To be able to identify multiples of whole numbers 

Activity 1:
Put a cross over any number that is not a multiple of 5.


55 40 63 900 87 5,555

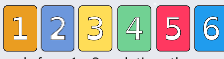
What do you notice about multiples of 5?

To be able to identify multiples of whole numbers 


Activity 2:
Respond to the following statements in full.


- a) 2,345 is not a multiple of 2.
True or false?
- b) 5,432 is not a multiple of 5.
True or false?
- c) 1,234 is a multiple of 10.
True or false?
- d) 2,310 is a multiple of 2, 5 and 10.
True or false?

To be able to identify multiples of whole numbers 

Activity 3: 
Draw two digit cards from 1 – 6 each time, then complete the table below:


Card 1	Card 2	Product	Multiple of...
3	4	12	1, 2, 3, 4, 6, 12

To be able to identify multiples of whole numbers 

Activity 4: 
Draw two digit cards from 1 – 9 each time, then complete the grid below:

x	1	2	3	4	5	6	7	8	9
1									
2									
3									
4									
5									
6									
7									
8									
9									

Do some multiples fit in more than one space?
Which number(s) appear most often in the table?
Why might that be?

To be able to identify multiples of whole numbers 

Activity 5:
Solve the word problems below.

- a) Jamal has an amount of money that is a multiple of nine and is three less than a multiple of seven. It is more than \$10, but less than \$40. What amount of money does Jamal have? Explain your answer.
- b) Ruth has received a parcel. Its total weight is less than 50 kg, a multiple of seven and five more than a multiple of six. How much does Ruth's parcel weigh? Explain your answer.

To be able to identify multiples of whole numbers



Evaluation:



A multiple of two
odd numbers is also
a multiple of two.

Is Astrobee's statement sometimes, always or never true?
Explain your answer.