
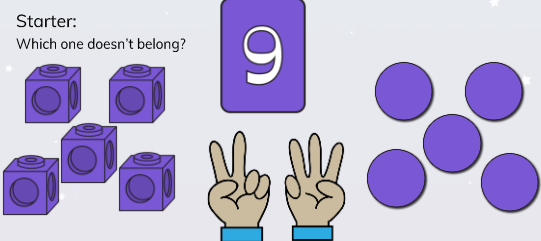









To be able to count objects to 100 


Starter:
Which one doesn't belong?



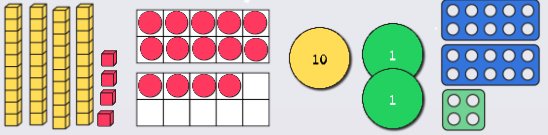
To be able to count objects to 100 


Activity 1:
Count and write the number of boats in the dock.

one	three	four	seven	nine	ten
					

To be able to count objects to 100 


Activity 2:
What numbers are shown below?
How can we write each in numerals and words?



To be able to count objects to 100 

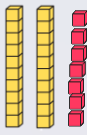
Activity 3:
Match the words to the numerals.

seventy	seventy-one	seventeen	seventy-seven
17	70	77	71


To be able to count objects to 100 

Activity 4:

The Base 10 pieces show the number seventy-two.




Do you agree with Astrobee?
Explain your answer.

To be able to count objects to 100 

Activity 5:

Each bag contains ten dollars.

How many dollars are there in total?
Write your answer in numerals and words.



What strategy did you use?
Was it the same strategy as your table partner?

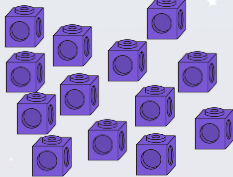
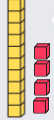
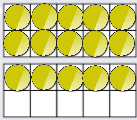
What is the best strategy to use?

To be able to count objects to 100



Evaluation:

Look at these three sets of objects:



Which is the hardest to count? Explain your answer.