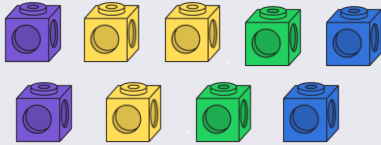


To be able to count objects



Starter:

Which cubes are the odd ones out? Explain your answer.



To be able to count objects



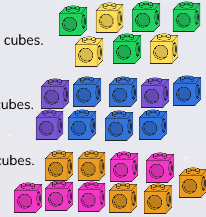
Activity 1:

Complete the sentences below.

- a) There are ___ green cubes and ___ yellow cubes.
There are ___ cubes altogether.

- b) There are ___ blue cubes and ___ purple cubes.
There are ___ cubes altogether.

- c) There are ___ pink cubes and ___ orange cubes.
There are ___ cubes altogether.



To be able to count objects



Activity 2:

Draw a line between the amount and the correct number.

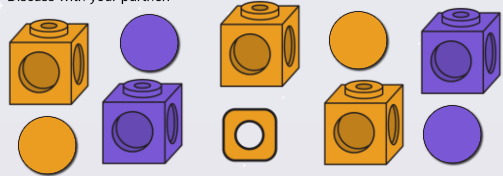


To be able to count objects



Activity 3:

Group the items and count how many there are in the different groups.
Discuss with your partner.



To be able to count objects



Evaluation:

There are 4 boats.



Explain the mistake Astrobee has made.