


To be able to count and write numbers up to 20

MathShed

Starter:
Which one doesn't belong?



Explain your answer.

To be able to count and write numbers up to 20

MathShed

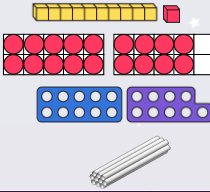
Activity 1:
Match each of the numbers below to its representation:

19

10

18

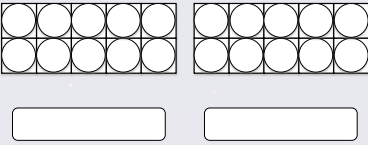
11



To be able to count and write numbers up to 20

MathShed

Activity Two:
Use the template below to write your own worded / numeral form numbers and draw counters to match.



To be able to count and write numbers up to 20

MathShed

Activity 3:
Complete the number tracks below.

	11	12		14		16	17		
--	----	----	--	----	--	----	----	--	--

	19	18		16		14	13		
--	----	----	--	----	--	----	----	--	--

To be able to count and write numbers up to 20

MathShed

Activity 4:
Cross out the number that doesn't belong.

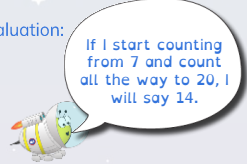
20	19	18	17
16	51	14	13

Why doesn't it belong?
Explain your answer.

To be able to count and write numbers up to 20

MathShed

Evaluation:
If I start counting from 7 and count all the way to 20, I will say 14.



Do you agree with Astrobee?
Explain your answer.