


To be able to identify, make and add equal groups

MathShed

Starter:
Which one doesn't belong?

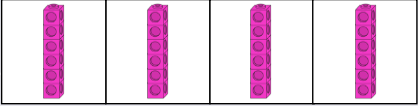


Explain your answer.

To be able to identify, make and add equal groups

MathShed

Activity 1:
Create your own equal grouping sketches and statements.



There are _ groups of _.

To be able to identify, make and add equal groups

MathShed


Activity 2:
How many different ways can you represent...

- a) three groups of 2?
- b) four groups of 4?
- c) five groups of 6?
- d) six groups of 3?

To be able to identify, make and add equal groups

MathShed

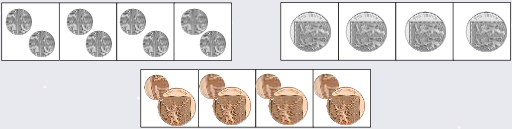
Activity 3:
Complete the table below:

	Add it
<p>Say it There are _____ equal groups with _____ cubes in each group. There are _____ cubes in total.</p>	Multiply it

To be able to identify, make and add equal groups

MathShed

Activity 4:
Circle the group that doesn't belong.




Explain your answer.

To be able to identify, make and add equal groups

MathShed

Evaluation:



Do you agree?
Explain your answer.