




To be able to recognise and name 3-D shapes 







Starter:
Which one doesn't belong?

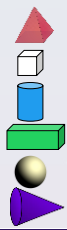



Explain your answer.

To be able to recognise and name 3-D shapes 

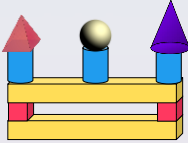
Activity 1:
Match the word card to the correct shape.

cone	
pyramid	
cylinder	
cube	
cuboid	
sphere	




To be able to recognise and name 3-D shapes 




Activity 2:
Use the sentences below to describe the model I have built:




There are __ cylinders.
There are __ pyramids.
There are __ cubes.
There are __ cuboids.
There are __ spheres.
There are __ cones.

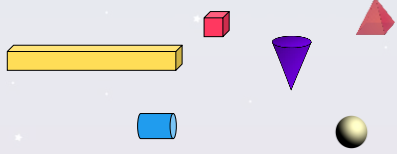
To be able to recognise and name 3-D shapes 


Activity 3:
Complete the following:

- Put a cross on the cubes, circle the cuboids.

- Put a cross on the spheres, circle the pyramids.

- Put a cross on the pyramids, circle the cones.


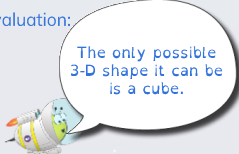
To be able to recognise and name 3-D shapes 

Activity 4:
Using a selection of 3-D shapes, try to build the tallest tower possible.



To be able to recognise and name 3-D shapes 

Evaluation:



Do you agree?
Explain your answer.

