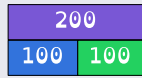



To be able to add and subtract multiples of 100



Starter:

Which one doesn't belong?



two hundred

297 298 299 300 301

Explain your answer.

To be able to add and subtract multiples of 100



Activity 1:

Use mathematics equipment to help you complete the sentences below.

4 ones and 2 ones equals

4 tens and 2 tens equals

4 hundreds and 2 hundreds equals

To be able to add and subtract multiples of 100



Activity 2:

Complete the table below:

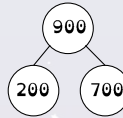
sketch	part-whole model	worded form	number sentence

To be able to add and subtract multiples of 100



Activity 3:

Use the part-whole model to write as many number sentences as you can.



$$700 + 200 = 900$$

$$\square = \square + \square$$

$$\square + \square = \square$$

$$\square = \square + \square$$

$$\square - \square = \square$$

$$\square = \square - \square$$

$$\square - \square = \square$$

$$\square = \square - \square$$

To be able to add and subtract multiples of 100



Activity 4:

Write a number story based on the number sentence below:

$$300 + 500 = 800$$

To be able to add and subtract multiples of 100



Activity 5:

Using multiples of 100, how many ways can you complete the number sentence?

$$\underline{\quad} + \underline{\quad} = 900$$

To be able to add and subtract multiples of 100



Evaluation:

If I add another
Base 10 hundred
piece, there will be
800 in total.



Do you agree?
Explain your answer.