

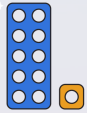


To be able to count forwards and backwards within 50



Starter:

What's the same? What's different?



Explain your answer.

To be able to count forwards and backwards within 50



Activity 1:

Use the number track to...

36	37	38	39	40	41	42	43	44	45	46	47	48	49	50
----	----	----	----	----	----	----	----	----	----	----	----	----	----	----



- count forwards from 41 to 49
- count backwards from 48 to 40
- count forwards from 36 to 50
- count backwards from 49 to 34
- can you count forwards/backwards from _ to _ without the number track?

To be able to count forwards and backwards within 50



Activity 2:

The illustrations below both show the same amount.
Which illustration is the easiest to count?




To be able to count forwards and backwards within 50



Activity 3:

How many cars are there?



30	31	32	33	34	35	36	37	38	39	40
----	----	----	----	----	----	----	----	----	----	----

To be able to count forwards and backwards within 50



Activity 4:

James says, "I have 36 cookies."



30	31	32	33	34	35	36	37	38	39	40
----	----	----	----	----	----	----	----	----	----	----

Do you agree?
Explain your answer.

To be able to count forwards and backwards within 50



Activity 5:

Jamal and Yasmin are counting.
Jamal says, "38, 39, 40, 31, 32, 33..."
Yasmin has written the following:

21	22	32	24	25	26
----	----	----	----	----	----

What has gone wrong each time?
Explain your answers.

To be able to count forwards and backwards within 50



Evaluation:



If I am counting backwards from 45 to 28, I will say the following numbers: 47, 40 and 29.

Do you agree with Astrobee?
Explain your answer.