



To be able to measure length in centimetres and metres 

**Starter:**

True or false?

The height of a person is measured in centimetres.



To be able to measure length in centimetres and metres 

**Activity 1:**

What is the length of the line?



To be able to measure length in centimetres and metres 

**Activity 2:**

What is the length of the loaf of bread?



To be able to measure length in centimetres and metres 

**Activity 3:**

Draw a line that is 13cm.



To be able to measure length in centimetres and metres 

**Activity 4:**

Eve is measuring the length of the toy car.

What mistake has she made?



The toy car is  
9cm long.



To be able to measure length in centimetres and metres 

**Activity 5:**

How long is the toy car?





To be able to measure length in centimetres and metres



**Activity 6:**

How tall is the llama?



To be able to measure length in centimetres and metres



**Activity 7:**

Find items in the classroom that are the following lengths.

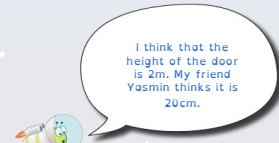
Less than 10cm long	Between 10cm and 1m long	More than 1m long



To be able to measure length in centimetres and metres



**Evaluation:**



Whose estimate is the most sensible for the height of the door? Explain your answer.