

HALLOWEEN ADDITION

Each picture below has a value. Use the clues to find out the value of each picture.

$$\text{ghost} + \text{ghost} + \text{pumpkin} = 16$$













$$\text{pumpkin} + \text{pumpkin} + \text{pumpkin} = 18$$

$$\text{skull} + \text{witch hat} + \text{pumpkin} = 21$$

$$\text{witch hat} + \text{ghost} + \text{pumpkin} = 19$$

$$\text{ghost} = \square \quad \text{pumpkin} = \square \quad \text{witch hat} = \square \quad \text{skull} = \square$$

Use the clues to complete the grid below, then complete the number sentences.

			= <input type="text"/>
			= 23
			= 20
			= <input type="text"/>
= 31			= <input type="text"/>
			= <input type="text"/>

$$\text{bat} + \text{spider} = \square$$

$$\text{cat} + \square = \text{vampire}$$

$$\square = \text{vampire} + \text{spider}$$

$$\square = \text{bat} + \text{vampire}$$

