


To be able to identify, make and add equal groups

MathShed

Starter:
Which one doesn't belong?

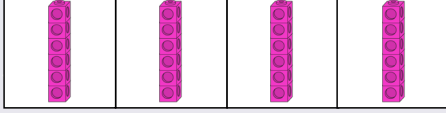


Explain your answer.

To be able to identify, make and add equal groups

MathShed

Activity 1:
Create your own equal grouping sketches and statements.

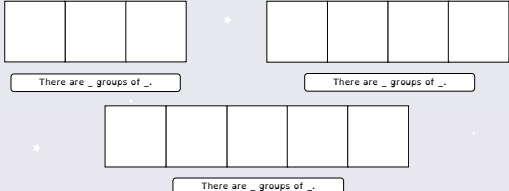


There are _ groups of _.

To be able to identify, make and add equal groups

MathShed

Activity 1:
Templates: Adult / peer assessment



To be able to identify, make and add equal groups

MathShed

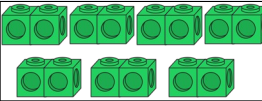
Activity 2:
How many different ways can you represent...

- a) three groups of 2?
- b) four groups of 4?
- c) five groups of 6?
- d) six groups of 3?

To be able to identify, make and add equal groups

MathShed


Activity 3:
Complete the table below:

	Add it
Say it There are _____ equal groups with _____ cubes in each group. There are _____ cubes in total.	Multiply it

To be able to identify, make and add equal groups

MathShed

Activity 4:
Circle the group that doesn't belong.



Explain your answer.



To be able to identify, make and add equal groups



Activity 4:

Match the groups together.



three
5s



three
4s



three
10s

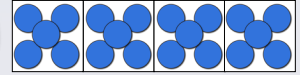
To be able to identify, make and add equal groups



Evaluation:



I have sketched
five equal groups
with each group
showing four.



Do you agree?

Explain your answer.