

To be able to use numbers to 20



Starter:

Which one is incorrect? Explain your answer.

$3 > 5$

$5 = 5$

$9 < 10$

To be able to use numbers to 20



Activity 1:

Fill in the missing numbers in the number track.

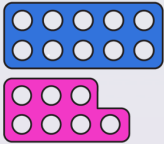
9		11			14
15			18	19	

To be able to use numbers to 20



Activity 2:

What number is represented? Write the numeral and word.



To be able to use numbers to 20



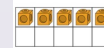
Activity 3:

Can you make each number 3 different ways using mathematical equipment?

12

20

seventeen



To be able to use numbers to 20



Activity 4:

Ruth has made a number - what do you think it is?




I have two tens frames.
Both are half full. What is
my number?

To be able to use numbers to 20



Evaluation:

I have made the
number 3.



Do you agree with Astrobee?
Explain your answer.